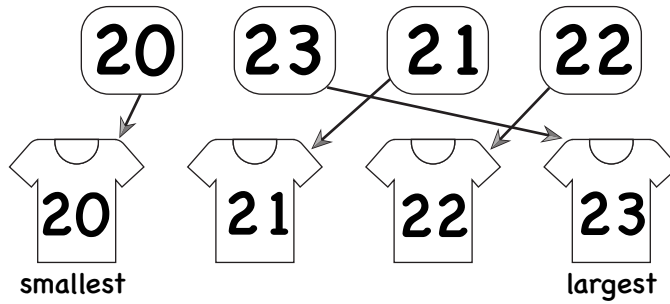


Ordering numbers up to 50

Example

Order from
smallest
to largest



A

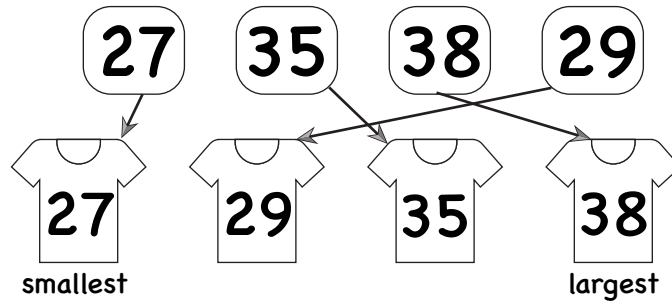
Write the numbers on the shirts from smallest to largest.

<p>a)</p> <div style="display: flex; justify-content: space-around; margin-bottom: 10px;"> 11 9 10 12 </div> <div style="display: flex; justify-content: space-around; margin-bottom: 10px;"> </div> <div style="display: flex; justify-content: space-between;"> smallest largest </div>	<p>b)</p> <div style="display: flex; justify-content: space-around; margin-bottom: 10px;"> 20 18 17 19 </div> <div style="display: flex; justify-content: space-around; margin-bottom: 10px;"> </div> <div style="display: flex; justify-content: space-between;"> smallest largest </div>
<p>c)</p> <div style="display: flex; justify-content: space-around; margin-bottom: 10px;"> 31 29 28 30 </div> <div style="display: flex; justify-content: space-around; margin-bottom: 10px;"> </div> <div style="display: flex; justify-content: space-between;"> smallest largest </div>	<p>d)</p> <div style="display: flex; justify-content: space-around; margin-bottom: 10px;"> 27 28 26 29 </div> <div style="display: flex; justify-content: space-around; margin-bottom: 10px;"> </div> <div style="display: flex; justify-content: space-between;"> smallest largest </div>
<p>e)</p> <div style="display: flex; justify-content: space-around; margin-bottom: 10px;"> 48 46 49 47 </div> <div style="display: flex; justify-content: space-around; margin-bottom: 10px;"> </div> <div style="display: flex; justify-content: space-between;"> smallest largest </div>	<p>f)</p> <div style="display: flex; justify-content: space-around; margin-bottom: 10px;"> 37 35 34 36 </div> <div style="display: flex; justify-content: space-around; margin-bottom: 10px;"> </div> <div style="display: flex; justify-content: space-between;"> smallest largest </div>
<p>g)</p> <div style="display: flex; justify-content: space-around; margin-bottom: 10px;"> 49 48 51 50 </div> <div style="display: flex; justify-content: space-around; margin-bottom: 10px;"> </div> <div style="display: flex; justify-content: space-between;"> smallest largest </div>	<p>h)</p> <div style="display: flex; justify-content: space-around; margin-bottom: 10px;"> 42 39 41 40 </div> <div style="display: flex; justify-content: space-around; margin-bottom: 10px;"> </div> <div style="display: flex; justify-content: space-between;"> smallest largest </div>

Ordering numbers up to 50

Example

Order from
smallest
to largest



B

Write the numbers on the shirts from smallest to largest.

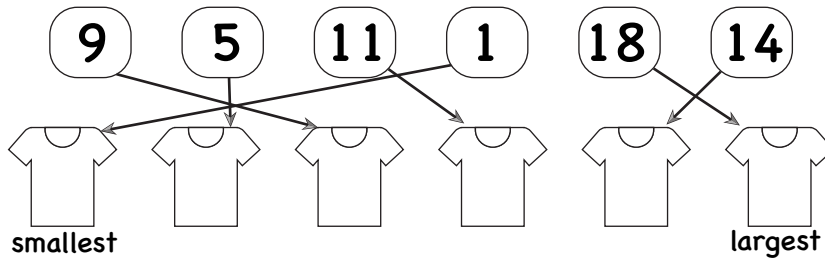
<p>a)</p> <div style="display: flex; justify-content: space-around; margin-bottom: 10px;"> 28 21 31 32 </div> <div style="display: flex; justify-content: space-around; align-items: center;"> </div> <div style="display: flex; justify-content: space-between; margin-top: 5px;"> smallest largest </div>	<p>b)</p> <div style="display: flex; justify-content: space-around; margin-bottom: 10px;"> 44 41 39 37 </div> <div style="display: flex; justify-content: space-around; align-items: center;"> </div> <div style="display: flex; justify-content: space-between; margin-top: 5px;"> largest smallest </div>
<p>c)</p> <div style="display: flex; justify-content: space-around; margin-bottom: 10px;"> 19 28 15 25 </div> <div style="display: flex; justify-content: space-around; align-items: center;"> </div> <div style="display: flex; justify-content: space-between; margin-top: 5px;"> smallest largest </div>	<p>d)</p> <div style="display: flex; justify-content: space-around; margin-bottom: 10px;"> 33 26 39 29 </div> <div style="display: flex; justify-content: space-around; align-items: center;"> </div> <div style="display: flex; justify-content: space-between; margin-top: 5px;"> largest smallest </div>
<p>e)</p> <div style="display: flex; justify-content: space-around; margin-bottom: 10px;"> 39 32 49 42 </div> <div style="display: flex; justify-content: space-around; align-items: center;"> </div> <div style="display: flex; justify-content: space-between; margin-top: 5px;"> smallest largest </div>	<p>f)</p> <div style="display: flex; justify-content: space-around; margin-bottom: 10px;"> 24 16 22 12 </div> <div style="display: flex; justify-content: space-around; align-items: center;"> </div> <div style="display: flex; justify-content: space-between; margin-top: 5px;"> largest smallest </div>
<p>g)</p> <div style="display: flex; justify-content: space-around; margin-bottom: 10px;"> 40 42 50 46 </div> <div style="display: flex; justify-content: space-around; align-items: center;"> </div> <div style="display: flex; justify-content: space-between; margin-top: 5px;"> smallest largest </div>	<p>h)</p> <div style="display: flex; justify-content: space-around; margin-bottom: 10px;"> 27 24 32 29 </div> <div style="display: flex; justify-content: space-around; align-items: center;"> </div> <div style="display: flex; justify-content: space-between; margin-top: 5px;"> largest smallest </div>

Ordering numbers up to 50

C

Example

Order from
smallest
to largest



Write the numbers on the shirts from smallest to largest.

a)

34	21	36	45	24	41
smallest					largest

b)

16	8	34	22	31	20
smallest					largest

c)

27	22	31	42	41	21
largest					smallest

d)

33	22	50	46	41	13
largest					smallest

e)

42	41	39	37	46	35
smallest					largest

f)

29	31	28	30	41	40
largest					smallest

Ordering numbers up to 50

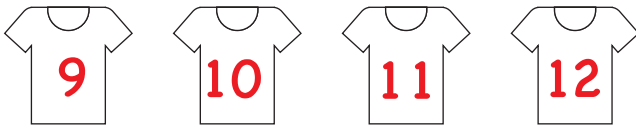
A

Answers

Write the numbers on the shirts from smallest to largest.

a)

11 9 10 12

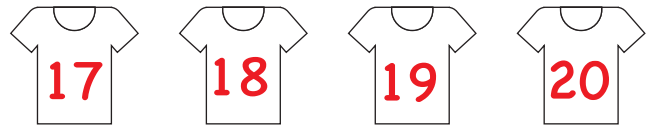


smallest

largest

b)

20 18 17 19

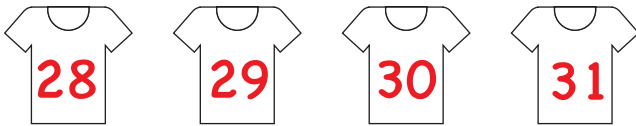


smallest

largest

c)

31 29 28 30

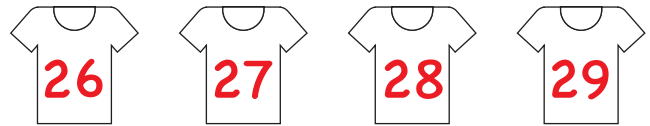


smallest

largest

d)

27 28 26 29

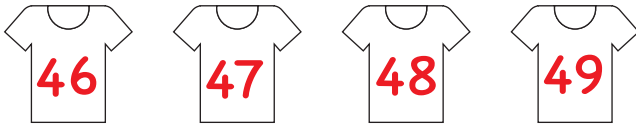


smallest

largest

e)

48 46 49 47

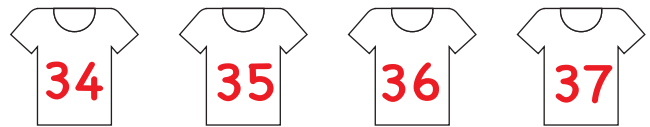


smallest

largest

f)

37 35 34 36



smallest

largest

g)

49 48 51 50

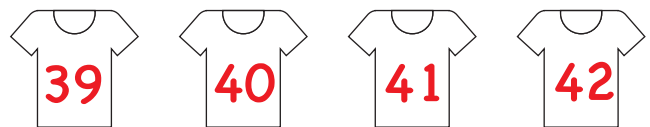


smallest

largest

h)

42 39 41 40



smallest

largest

Ordering numbers up to 50

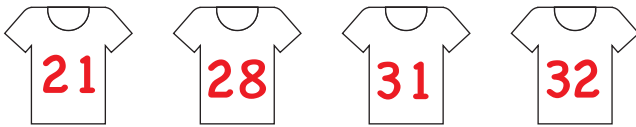
B

Answers

Write the numbers on the shirts from smallest to largest.

a)

28 21 31 32

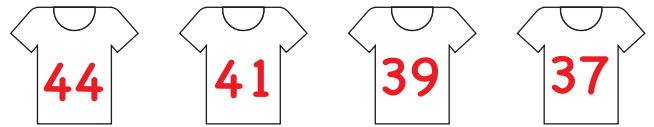


smallest

largest

b)

44 41 39 37

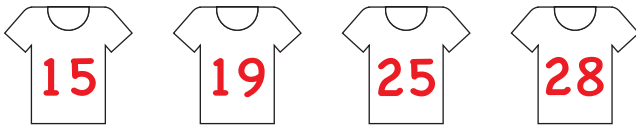


largest

smallest

c)

19 28 15 25

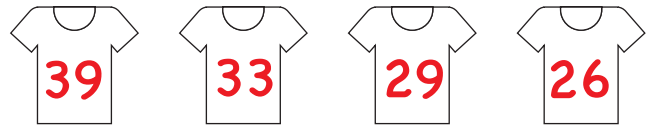


smallest

largest

d)

33 26 39 29

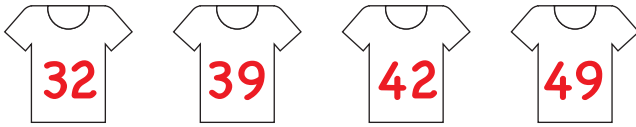


largest

smallest

e)

39 32 49 42

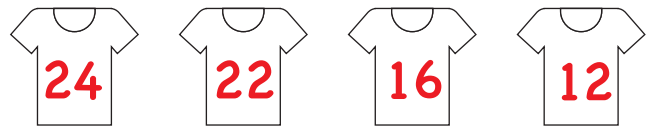


smallest

largest

f)

24 16 22 12

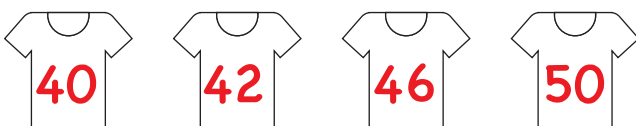


largest

smallest

g)

40 42 50 46

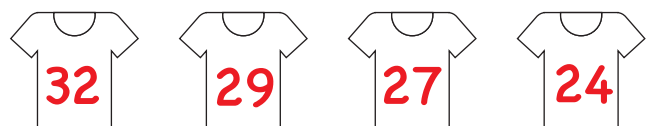


smallest

largest

h)

27 24 32 29



largest





































smallest

Ordering numbers up to 50

C

Answers

Write the numbers on the shirts from smallest to largest.

a)	34	21	36	45	24	41
						
	smallest					largest
b)	16	8	34	22	31	20
						
	smallest					largest
c)	27	22	31	42	41	21
						
	largest					smallest
d)	33	22	50	46	41	13
						
	largest					smallest
e)	42	41	39	37	46	35
						
	smallest					largest
f)	29	31	28	30	41	40
						
	largest					smallest