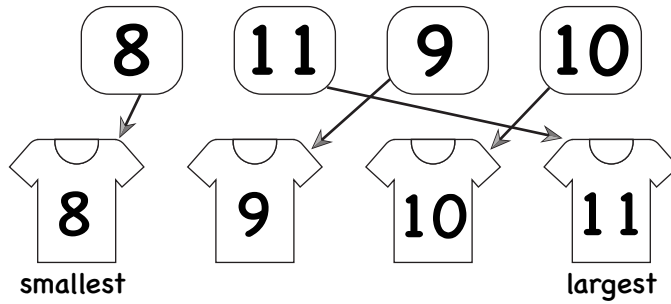


Ordering numbers up to 20

A

Example

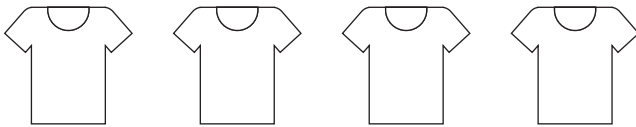
Order from
smallest
to largest



Order the following numbers from smallest to largest.

a)

5 2 4 3

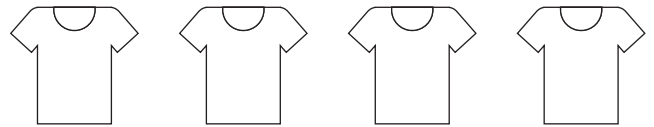


smallest

largest

b)

11 12 10 13

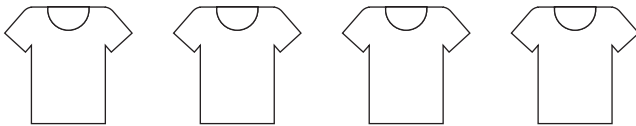


smallest

largest

c)

7 9 6 8

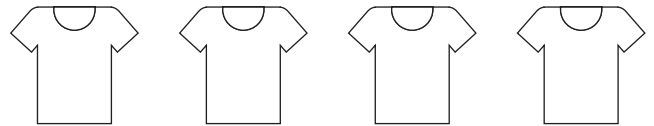


smallest

largest

d)

12 11 9 10

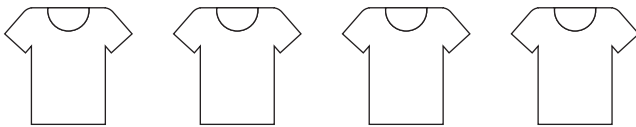


smallest

largest

e)

6 5 4 7

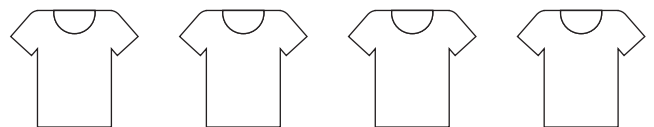


smallest

largest

f)

2 1 4 3

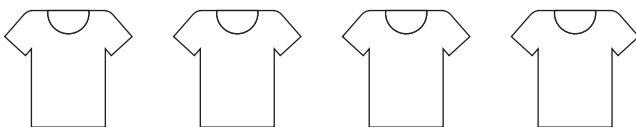


smallest

largest

g)

18 16 17 15

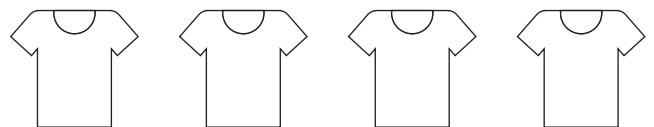


smallest

largest

h)

14 12 13 15



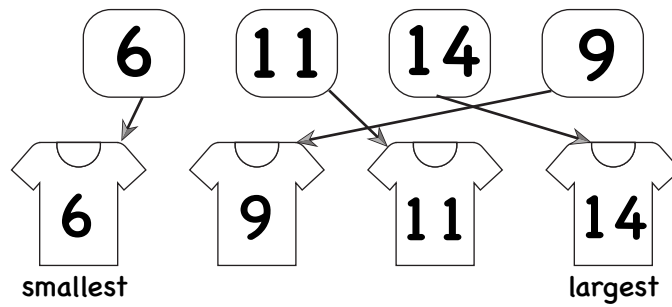
smallest

largest

Ordering numbers up to 20

Example

Order from
smallest
to largest



B

Write the numbers on the shirts from smallest to largest.

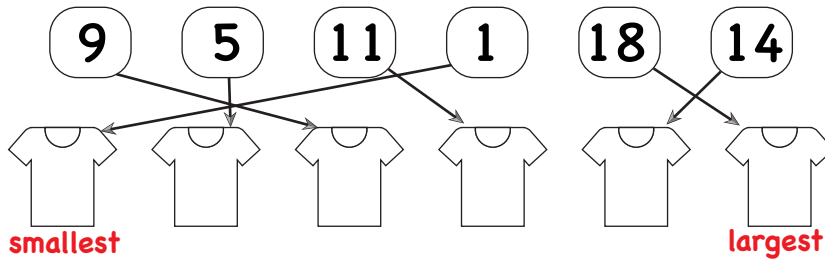
<p>a)</p> <div style="display: flex; justify-content: space-around; margin-bottom: 10px;"> 8 11 6 14 </div> <div style="display: flex; justify-content: space-around;"> </div> <div style="display: flex; justify-content: space-between; margin-top: 5px;"> smallest largest </div>	<p>b)</p> <div style="display: flex; justify-content: space-around; margin-bottom: 10px;"> 20 12 14 16 </div> <div style="display: flex; justify-content: space-around;"> </div> <div style="display: flex; justify-content: space-between; margin-top: 5px;"> largest smallest </div>
<p>c)</p> <div style="display: flex; justify-content: space-around; margin-bottom: 10px;"> 12 9 16 15 </div> <div style="display: flex; justify-content: space-around;"> </div> <div style="display: flex; justify-content: space-between; margin-top: 5px;"> smallest largest </div>	<p>d)</p> <div style="display: flex; justify-content: space-around; margin-bottom: 10px;"> 17 20 18 14 </div> <div style="display: flex; justify-content: space-around;"> </div> <div style="display: flex; justify-content: space-between; margin-top: 5px;"> largest smallest </div>
<p>e)</p> <div style="display: flex; justify-content: space-around; margin-bottom: 10px;"> 8 5 2 10 </div> <div style="display: flex; justify-content: space-around;"> </div> <div style="display: flex; justify-content: space-between; margin-top: 5px;"> smallest largest </div>	<p>f)</p> <div style="display: flex; justify-content: space-around; margin-bottom: 10px;"> 10 2 11 5 </div> <div style="display: flex; justify-content: space-around;"> </div> <div style="display: flex; justify-content: space-between; margin-top: 5px;"> largest smallest </div>
<p>g)</p> <div style="display: flex; justify-content: space-around; margin-bottom: 10px;"> 16 19 11 13 </div> <div style="display: flex; justify-content: space-around;"> </div> <div style="display: flex; justify-content: space-between; margin-top: 5px;"> smallest largest </div>	<p>h)</p> <div style="display: flex; justify-content: space-around; margin-bottom: 10px;"> 12 9 15 7 </div> <div style="display: flex; justify-content: space-around;"> </div> <div style="display: flex; justify-content: space-between; margin-top: 5px;"> largest smallest </div>

Ordering numbers up to 20

C

Example

Order from
smallest
to largest



Write the numbers on the shirts from smallest to largest or largest to smallest.

a)	9	5	11	1	18	14
	smallest					largest
b)	6	15	7	3	10	17
	smallest					largest
c)	10	8	11	13	19	9
	largest					smallest
d)	14	11	16	18	19	13
	largest					smallest
e)	20	17	12	9	10	16
	smallest					largest
f)	12	13	11	20	18	16
	largest					smallest

Ordering numbers up to 20

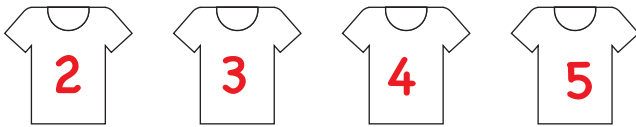
A

Answers

Order the following numbers from smallest to largest.

a)

5 2 4 3




smallest

largest

b)

11 12 10 13

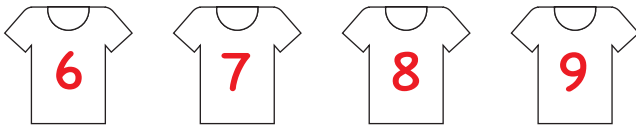


smallest

largest

c)

7 9 6 8

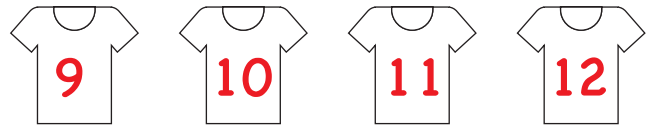


smallest

largest

d)

12 11 9 10

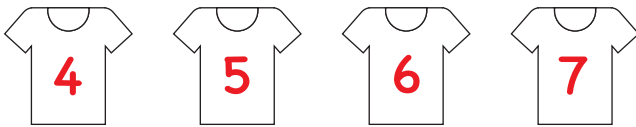


smallest

largest

e)

6 5 4 7

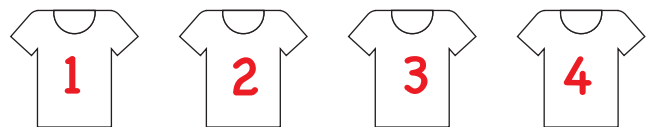


smallest

largest

f)

2 1 4 3

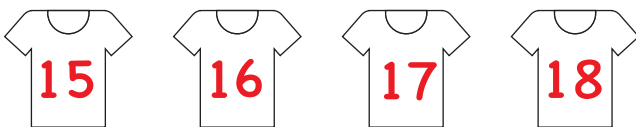


smallest

largest

g)

18 16 17 15

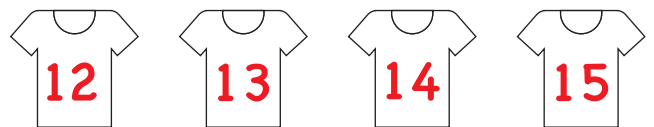


smallest

largest

h)

14 12 13 15



smallest

largest

Ordering numbers up to 20

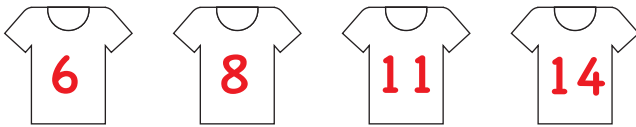
B

Answers

Write the numbers on the shirts from smallest to largest.

a)

8 11 6 14

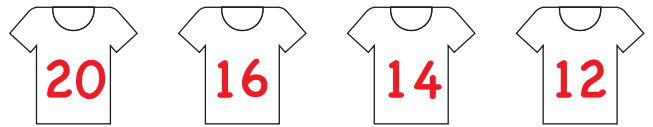


smallest

largest

b)

20 12 14 16

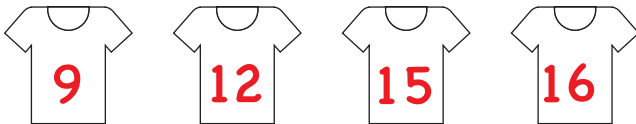


largest

smallest

c)

12 9 16 15

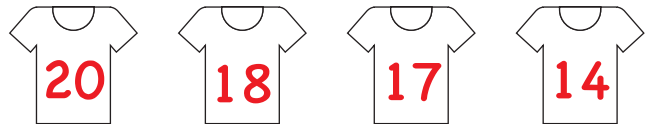


smallest

largest

d)

17 20 18 14

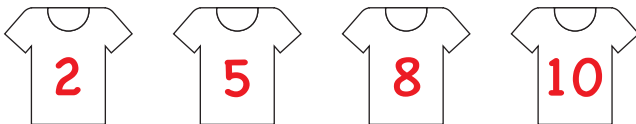


largest

smallest

e)

8 5 2 10

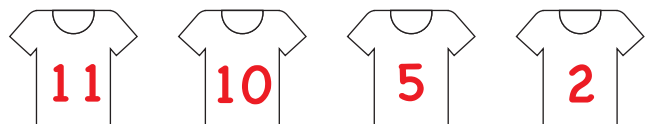


smallest

largest

f)

10 2 11 5




largest

smallest

g)

16 19 11 13

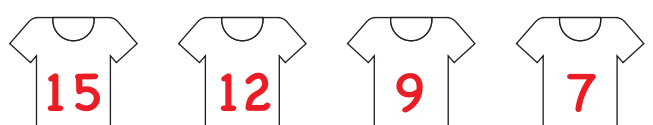


smallest

largest

h)

12 9 15 7



largest





































smallest

Ordering numbers up to 20

C

Answers

Write the numbers on the shirts from smallest to largest or largest to smallest

a)	9	5	11	1	18	14
						
	smallest					largest
b)	6	15	7	3	10	17
						
	smallest					largest
c)	10	8	11	13	19	9
						
	largest					smallest
d)	14	11	16	18	19	13
						
	largest					smallest
e)	20	17	12	9	10	16
						
	smallest					largest
f)	12	13	11	20	18	16
						
	largest					smallest