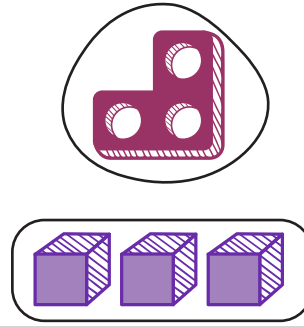
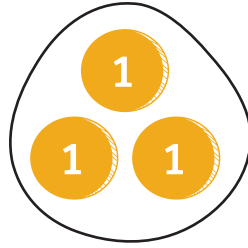


Example

numbers 1- 7

There are many different resources we use in school to show number



$$= 3$$

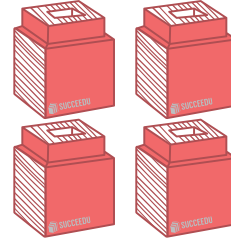
Count the items and write the number

1)



$$= \underline{\hspace{2cm}}$$

2)




$$= \underline{\hspace{2cm}}$$

3)



$$= \underline{\hspace{2cm}}$$

4)



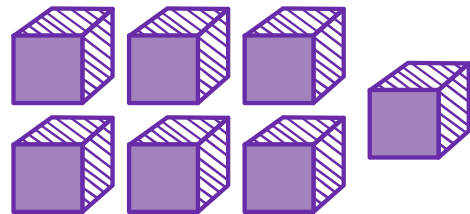
$$= \underline{\hspace{2cm}}$$

5)



$$= \underline{\hspace{2cm}}$$

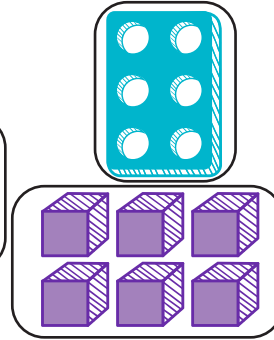

6)



$$= \underline{\hspace{2cm}}$$

Example

There are many different resources we use in school to show number



numbers 1 - 12

$$= 6$$

Count the items and write the number

1)



=

2)



=

3)



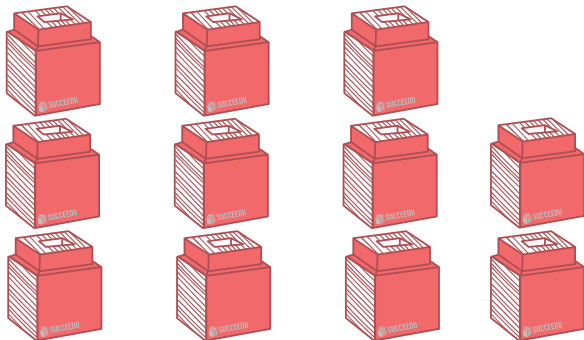
=

4)



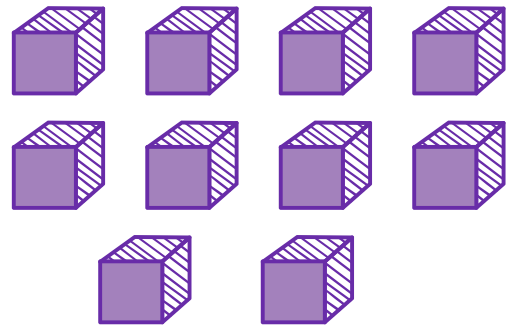
=

5)



=

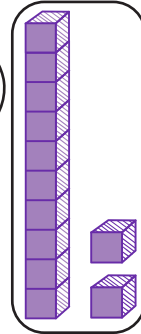
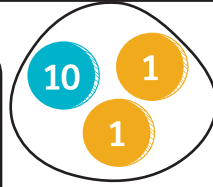
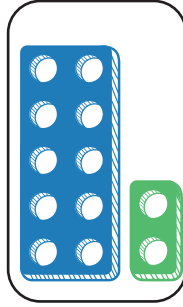
6)



=

Example

There are many different resources we use in school to show number



numbers 10 - 20

= 12

Count the items and write the number

1) = _____

2) = _____

3) = _____

4) = _____

5) = _____

6) = _____

7) = _____

8) = _____